



Name:


Grade:

School:

Q. Which among the follow represents the arrangement of atoms in a solid, liquid and gas?










Index

Q. How does salt dissolve in water? Tick the correct representation.







Index

Q. Fill ✓ and ✗ in the appropriate boxes.

✓ : Yes

✗ : No

Substance	Dissolves in water	Dissolves in oil
Common salt	<input type="checkbox"/>	<input type="checkbox"/>
Sugar	<input type="checkbox"/>	<input type="checkbox"/>
Candle wax	<input type="checkbox"/>	<input type="checkbox"/>
Kerosene	<input type="checkbox"/>	<input type="checkbox"/>